

- Which molecular formula is correctly paired with its corresponding empirical formula?
A) CO_2 and CO B) C_2H_2 and CH_2
C) C_6H_6 and C_2H_2 D) P_4O_{10} and P_2O_5
- What is the empirical formula for C_3H_6 ?
A) CH B) CH_2 C) CH_3 D) CH_6
- What is the empirical formula for the compound $\text{C}_6\text{H}_{12}\text{O}_6$?
A) CH_2O B) $\text{C}_2\text{H}_4\text{O}_2$
C) $\text{C}_3\text{H}_6\text{O}_3$ D) $\text{C}_6\text{H}_{12}\text{O}_6$
- The empirical formula of a compound is CH_2 . The molecular formula of this compound could be
A) CH_4 B) C_2H_2 C) C_2H_4 D) C_2H_6
- The empirical formula of a compound is CH_2 . The molecular formula of this compound could be
A) CH_4 B) C_2H_2 C) C_2H_4 D) C_3H_3
- The formula H_2O_2 is an example of
A) a molecular formula
B) an empirical formula
C) an ionic formula
D) an organic formula
- What is the gram formula mass of $\text{Na}_2\text{CO}_3 \cdot 10\text{H}_2\text{O}$?
A) 106 g B) 142 g C) 266 g D) 286 g
- The molar mass of $\text{Ba}(\text{OH})_2$ is
A) 154.3 g B) 155.3 g
C) 171.3 g D) 308.6 g
- What is the gram-formula mass of $\text{Ca}_3(\text{PO}_4)_2$?
A) 248 g/mol B) 263 g/mol
C) 279 g/mol D) 310. g/mol
- What is the gram formula mass of Li_2SO_4 ?
A) 54 g B) 55 g C) 110 g D) 206 g
- Which substance has the greatest molecular mass?
A) H_2O_2 B) NO C) CF_4 D) I_2
- Which represents the greatest mass of chlorine?
A) 1 mole of chlorine
B) 1 atom of chlorine
C) 1 gram of chlorine
D) 1 molecule of chlorine
- What is the total number of atoms of oxygen in the formula $\text{Al}(\text{ClO}_3)_3 \cdot 6\text{H}_2\text{O}$?
A) 6 B) 9 C) 10 D) 15
- How many moles of water are contained in 0.250 mole of $\text{CuSO}_4 \cdot 5\text{H}_2\text{O}$?
A) 1.25 B) 4.50 C) 40.0 D) 62.5
- What is the total mass of oxygen in 1.00 mole of $\text{Al}_2(\text{CrO}_4)_3$?
A) 192 g B) 112 g
C) 64.0 g D) 48.0 g
- The total number of moles represented by 20 grams of CaCO_3 is
A) 1 B) 2 C) 0.1 D) 0.2
- Which sample contains a mole of atoms?
A) 23 g Na B) 24 g C
C) 42 g Kr D) 78 g K
- What is the total mass in grams of 0.75 mole of SO_2 ?
A) 16 g B) 24 g C) 32 g D) 48 g
- What is the mass in grams of 1.00 mole of O_2 gas?
A) 11.2 B) 16.0 C) 22.4 D) 32.0
- If the empirical formula for an organic compound is CH_2O , then the molecular mass of the compound could be
A) 135 B) 60 C) 45 D) 15
- A compound has an empirical formula of CH_2 and a molecular mass of 56. What is its molecular formula?
A) CH_2 B) C_2H_4 C) C_3H_6 D) C_4H_8
- Which of the following gases has the greatest density at STP?
A) SO_2 B) CO_2 C) Cl_2 D) N_2
- A sample of an unknown gas at STP has a density of 1.25 grams per liter. What is the gram molecular mass of this gas?
A) 28.0 g B) 44.0 g
C) 64.0 g D) 80.0 g
- A compound consists of 25.9% nitrogen and 74.1% oxygen by mass. What is the empirical formula of the compound?
A) NO B) NO_2 C) N_2O D) N_2O_5

Regents review Stoichiometry

25. What is the empirical formula of a compound that contains 30.4% nitrogen and 69.6% oxygen by mass?

- A) NO B) NO₂ C) N₂O₃ D) N₂O₅

26. A compound consists of 40.% sulfur and 60.% oxygen by mass. What is the empirical formula of this compound?

- A) SO B) SO₂ C) SO₃ D) SO₄

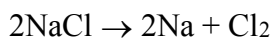
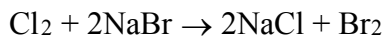
27. What is the percent by mass of carbon in CO₂?

- A) 12 B) 27 C) 44 D) 73

28. What is the percent composition by mass of nitrogen in NH₄NO₃ (gram-formula mass = 80.0 grams/mole)?

- A) 17.5% B) 35.0%
C) 52.5% D) 60.0%

29. Given the balanced equations representing two chemical reactions:



Which type of chemical reactions are represented by these equations?

- A) single replacement and decomposition
B) single replacement and double replacement
C) synthesis and decomposition
D) synthesis and double replacement

30. Which balanced equation represents a chemical change?

- A) H₂O(l) + energy → H₂O(g)
B) 2H₂O(l) + energy → 2H₂(g) + O₂(g)
C) H₂O(l) → H₂O(s) + energy
D) H₂O(g) → H₂O(l) + energy

31. 2 CO(g) + O₂(g) ↔ 2 CO₂(g)

What type of reaction is shown above?

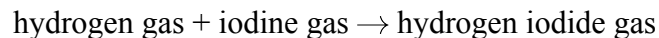
- A) synthesis B) decomposition
C) single replacement D) double replacement

32. Ba(NO₃)₂(aq) + Na₂SO₄(aq) →
2 NaNO₃(aq) + BaSO₄(s)

What type of reaction is shown above?

- A) synthesis B) decomposition
C) single replacement D) double replacement

33. Given the reaction at 101.3 kilopascals and 298 K:



This reaction is classified as

- A) endothermic, because heat is absorbed
B) endothermic, because heat is released
C) exothermic, because heat is absorbed
D) exothermic, because heat is released

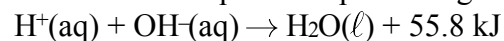
34. Which equation shows a conservation of mass?

- A) Na + Cl₂ → NaCl B) Al + Br₂ → AlBr₃
C) H₂O → H₂ + O₂ D) PCl₅ → PCl₃ + Cl₂

35. Which equation shows conservation of atoms?

- A) H₂ + O₂ → H₂O
B) H₂ + O₂ → 2H₂O
C) 2H₂ + O₂ → 2H₂O
D) 2H₂ + 2O₂ → 2H₂O


36. Given the balanced equation representing a reaction:



In this reaction there is conservation of

- A) mass, only
B) mass and charge, only
C) mass and energy, only
D) mass, charge, and energy

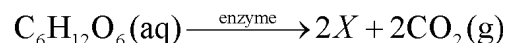
37. Base your answer to the following question on Given the unbalanced equation:



When the equation is balanced using the *smallest* whole-number coefficients, what is the coefficient of Al?

- A) 1 B) 2 C) 3 D) 4

38. Given the balanced equation with an unknown compound represented by X:

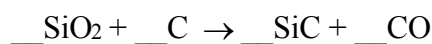


Which compound is represented by X?

- A) CH₃OH(aq) B) CH₂(OH)₄(aq)
C) CH₃CH₂OH(aq) D) CH₂OHCH₂OH(aq)

Reagents review Stoichiometry

39. When the equation



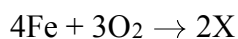
is correctly balanced using whole-number coefficients, the sum of all the coefficients is

- A) 6 B) 7 C) 8 D) 9

40. Which chemical equation is correctly balanced?

- A) $\text{H}_2(\text{g}) + \text{O}_2(\text{g}) \rightarrow \text{H}_2\text{O}(\text{g})$
 B) $\text{N}_2(\text{g}) + \text{H}_2(\text{g}) \rightarrow \text{NH}_3(\text{g})$
 C) $2\text{NaCl}(\text{s}) \rightarrow \text{Na}(\text{s}) + \text{Cl}_2(\text{g})$
 D) $2\text{KCl}(\text{s}) \rightarrow 2\text{K}(\text{s}) + \text{Cl}_2(\text{g})$

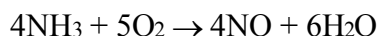
41. Given the incomplete equation:



Which compound is represented by X?

- A) FeO B) Fe₂O₃
 C) Fe₃O₂ D) Fe₃O₄

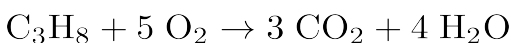
42. Given the balanced equation representing a reaction:



What is the *minimum* number of moles of O₂ that are needed to completely react with 16 moles of NH₃?

- A) 16 mol B) 20. mol
 C) 64 mol D) 80. mol

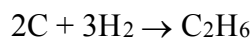
43. Given the balanced equation representing the reaction between propane and oxygen:



According to this equation, which ratio of oxygen to propane is correct?

- A) $\frac{5 \text{ grams O}_2}{1 \text{ gram C}_3\text{H}_8}$ B) $\frac{5 \text{ moles O}_2}{1 \text{ mole C}_3\text{H}_8}$
 C) $\frac{10 \text{ grams O}_2}{11 \text{ grams C}_3\text{H}_8}$ D) $\frac{10 \text{ moles O}_2}{11 \text{ moles C}_3\text{H}_8}$

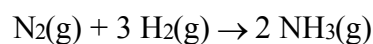
44. Base your answer to the following question on Given the balanced equation:



What is the total number of moles of C that must completely react to produce 2.0 moles of C₂H₆?

- A) 1.0 mol B) 2.0 mol
 C) 3.0 mol D) 4.0 mol

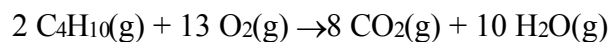
45. Given the reaction:



What is the total number of moles of NH₃(g) produced when 10. moles of H₂(g) reacts completely with N₂(g)?

- A) 6.7 B) 2.0 C) 3.0 D) 15

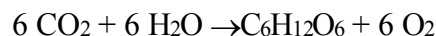
46. Base your answer to the following question on Given the balanced equation:



What is the total number of moles of O₂(g) that must react completely with 5.00 moles of C₄H₁₀(g)?

- A) 10.0 B) 20.0 C) 26.5 D) 32.5

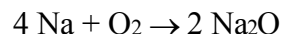
47. Base your answer to the following question on Given the reaction:



What is the total number of moles of water needed to make 2.5 moles of C₆H₁₂O₆ ?

- A) 2.5 B) 6.0 C) 12 D) 15

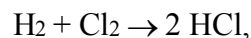
48. Given the reaction:



How many grams of oxygen are completely consumed in the production of 1.00 mole of Na₂O?

- A) 16.0 B) 32.0 C) 62.0 D) 124

49. According to the reaction



the production of 2.0 moles of HCl would require 70. grams of Cl₂ and

- A) 1.0 g of H₂ B) 2.0 g of H₂
 C) 3.0 g of H₂ D) 4.0 g of H₂

50. Given the reaction:

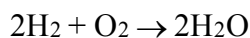


What is the total mass of H₂O produced when 32 grams of Cu is completely consumed?

- A) 9.0 g B) 18 g C) 36 g D) 72 g

Regents review Stoichiometry

51. Base your answer to the following question on Given the balanced equation representing a reaction:



What is the total mass of water formed when 8 grams of hydrogen reacts completely with 64 grams of oxygen?

- A) 18 g B) 36 g C) 56 g D) 72 g

52. What is the approximate total number of atoms in 1.0 mole of lithium?

- A) 1.0×10^{23} B) 6.0×10^{23}
C) 3.0 D) 6.9

53. How many molecules are in 0.25 mole of O_2 ?

- A) 12×10^{23} B) 6.0×10^{23}
C) 3.0×10^{23} D) 1.5×10^{23}

54. What is the total volume occupied by 132 grams of CO_2 (g) at STP?

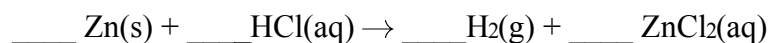
- A) 22.4 L B) 33.6 L
C) 44.8 L D) 67.2 L

55. At STP, 1 mole of $\text{He}(\text{g})$ contains the same number of atoms as

- A) 22.4 L of $\text{H}_2(\text{g})$ B) 44.8 L of $\text{H}_2(\text{g})$
C) 22.4 L of $\text{Ar}(\text{g})$ D) 44.8 L of $\text{Ar}(\text{g})$

56. Base your answer to the following question on the information below.

A 1.0-gram strip of zinc is reacted with hydrochloric acid in a test tube. The unbalanced equation below represents the reaction.



Balance the equation for the reaction of zinc and hydrochloric acid, using the smallest whole-number coefficients.

Base your answers to questions **57** and **58** on the information below.

Vitamin C, also known as ascorbic acid, is water soluble and cannot be produced by the human body. Each day, a person's diet should include a source of vitamin C, such as orange juice. Ascorbic acid has a molecular formula of $\text{C}_6\text{H}_8\text{O}_6$ and a gram-formula mass of 176 grams per mole.

57. Show a numerical setup for calculating the percent composition by mass of oxygen in ascorbic acid.
58. Write the empirical formula for ascorbic acid.
-

Regents review Stoichiometry

Base your answers to questions **59** and **60** on the information below.

A tablet of one antacid contains citric acid, $\text{H}_3\text{C}_6\text{H}_5\text{O}_7$, and sodium hydrogen carbonate, NaHCO_3 . When the tablet dissolves in water, bubbles of CO_2 are produced. This reaction is represented by the incomplete equation below.



59. Determine the total number of moles of sodium hydrogen carbonate that will completely react with 0.010 mole of citric acid.
60. write the formula of the missing product.
-

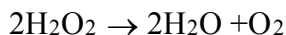
61. Base your answer to the following question on the information below.

In an experiment, 2.54 grams of copper completely reacts with sulfur, producing 3.18 grams of copper(I) sulfide.

Write the chemical formula of the compound produced.

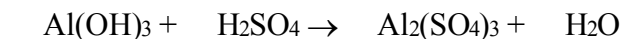
Base your answers to questions **62** through **64** on the information below.

Hydrogen peroxide, H_2O_2 , is a water-soluble compound. The concentration of an aqueous hydrogen peroxide solution that is 3% by mass H_2O_2 is used as an antiseptic. When the solution is poured on a small cut in the skin, H_2O_2 reacts according to the balanced equation below.



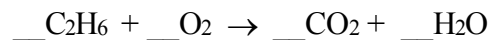
62. Determine the gram-formula mass of H_2O_2 .
63. Calculate the total mass of H_2O_2 in 20.0 grams of an aqueous H_2O_2 solution that is used as an antiseptic. Your response must include *both* a numerical setup and the calculated result.
64. Identify the type of chemical reaction represented by the balanced equation.
-

65. Given the unbalanced equation:



Balance the equation using smallest whole number coefficients.

66. Given the unbalanced equation:



Balance the equation using smallest whole number coefficients.

67. In a laboratory experiment, a student determined the mass of the product, LiCl(s), to be 0.333 grams.

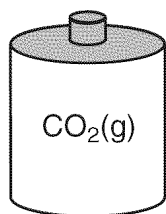
a Calculate the gram formula mass of LiCl(s). Round atomic masses from the Periodic Table to the nearest tenth. [Show all work. Indicate the correct answer in proper significant figures and include an appropriate unit.]

b Calculate the number of moles of LiCl(s) produced. [Show all work. Indicate the correct answer in proper significant figures.]

68. Base your answer to the following question on the information and diagrams below.

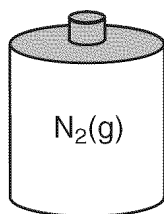
Cylinder A contains 22.0 grams of CO₂(g) and cylinder B contains N₂(g). The volumes, pressures, and temperatures of the two gases are indicated under each cylinder.

Cylinder A



V = 12.3 L
P = 1.0 atm
T = 300. K

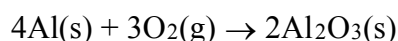
Cylinder B



V = 12.3 L
P = 1.0 atm
T = 300. K

Explain why the number of molecules of N₂(g) in cylinder B is the same as the number of molecules of CO₂(g) in cylinder A.

69. Given the balanced equation:



What is the total number of moles of O₂(g) that must react completely with 8.0 moles of Al(s) in order to form Al₂O₃(s)?

70. Base your answer to the following question on the information below.

A scientist in a chemistry laboratory determined the molecular formulas for two compounds containing nitrogen and oxygen to be NO₂ and N₂O₅.

Write an IUPAC name for the compound N₂O₅.